

Time: 10 Minutes


Paper Math 2

Total Marks: 10

3rd Month, 4th Week, 3rd Day Syllabus: Review Exercise. Q # 3.

Q.1. Match the coloured shape with the correct fraction. (10)

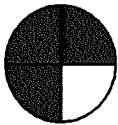
درج ذیل رنگ دار اشکال کو درست فرکشن سے ملائیں۔



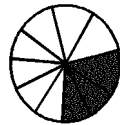
$$\frac{3}{4}$$



$$\frac{1}{5}$$



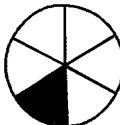
$$\frac{2}{7}$$



$$\frac{8}{9}$$



$$\frac{5}{6}$$



$$\frac{7}{10}$$

---



---



---



---



---

Time: 10 Minutes


Paper Math 2

Total Marks: 10

3rd Month, 4th Week, 3rd Day Syllabus: Review Exercise. Q # 3.

Q.1. Match the coloured shape with the correct fraction. (10)

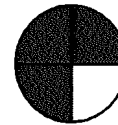
درج ذیل رنگ دار اشکال کو درست فرکشن سے ملائیں۔



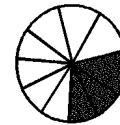
$$\frac{3}{4}$$



$$\frac{1}{5}$$



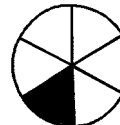
$$\frac{2}{7}$$



$$\frac{8}{9}$$



$$\frac{5}{6}$$



$$\frac{7}{10}$$

---



---



---



---



---